

Year 2 home learning week commencing 4th May 2020

Maths

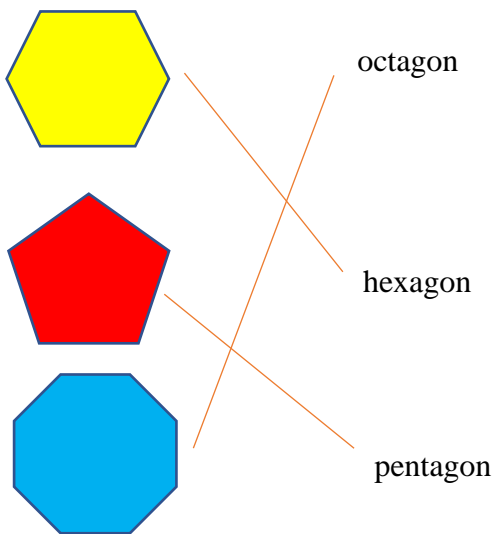
We are continuing our learning about 2D (flat) shapes to include some more shapes with different numbers of sides.

Watch the maths video for Week 3 here before you do the activities below.

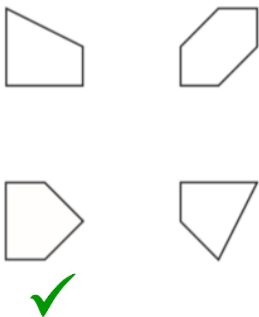
<https://www.youtube.com/watch?v=vfTGI9mMyHc&feature=youtu.be>

Activity 1

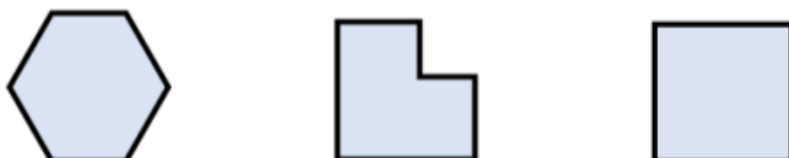
1. Match the name to the shape:



2. Tick the pentagon:



3. Which shape is the odd one out? Why is it the odd one out?



The square is the odd one out because it is a quadrilateral and the other two shapes are hexagons.

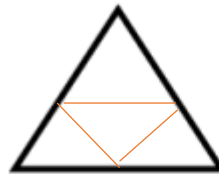
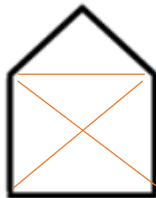
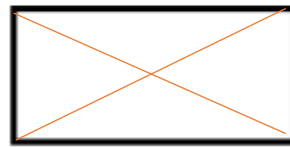
Activity 2

1. Miss Coope says 'a hexagon is a type of quadrilateral'. Is she right or wrong? Explain your answer.

She is wrong because quadrilaterals have 4 sides but a hexagon has 6 sides.

2. Draw lines to make **four triangles** inside each shape.

Example:



3. Go on a shape hunt in your house. Try and find:

A triangle
A quadrilateral
A pentagon
A hexagon
An octagon

Draw pictures or take photos of the things you find.

As long as these shapes have the right number of sides, they are correct!