

Year 2 home learning week commencing 13th July 2020

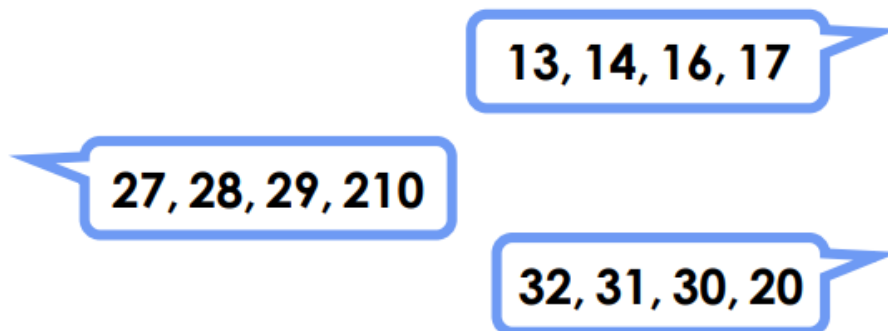
Maths

This week, I have put together a range of problem solving activities using some of the skills we have learned in Year 2. Some of them are quite tricky but have a go... I hope you enjoy them!

1.

Spot the mistakes




Count up and down in 1s



2.




Number lines

Show **8** on each number line.



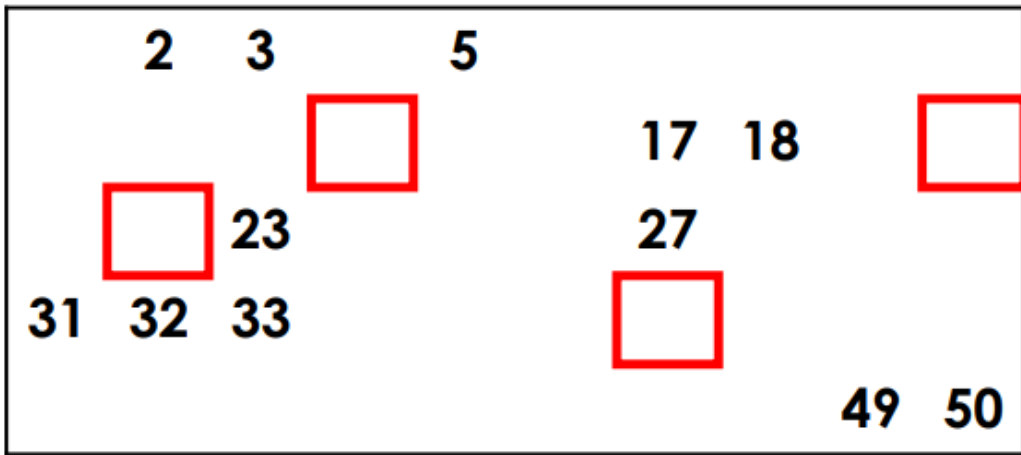
3.

Show **80** on each number line.



4.

Fill in the **red boxes**.



5.

$9 + 8 = \square$

9 + 8 is the same as:

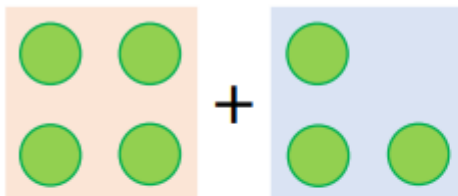
10 + 10 take away \square

Double \square add 1

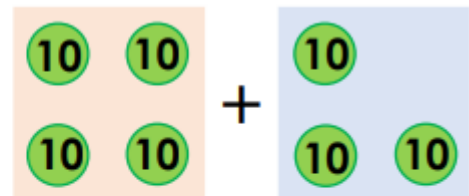
Double \square take away 1

Other: _____

6.




$\square + \square = \square$




$\square + \square = \square$

7.


How many hiding?



6 hens in total
 hens in the hut



8 hens in total
 hens in the hut



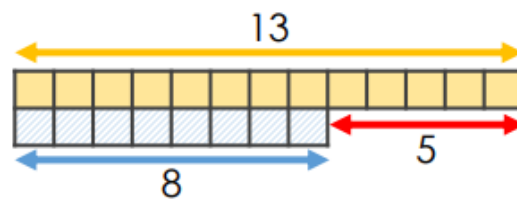
5 hens in total
 hens in the hut

8.

True or false? ✓ ✗

$13 - 5 \overset{\checkmark}{=} 8$

$13 - 8 = 5$



$13 = 5 + 8$

$5 - 13 = 8$

$13 - 5 = 8$

$5 = 8 + 13$

9.

Which answer?

$$73 - 30 = \square$$

73, 63, **53**.
It's **53**.

63, 53, **43**.
It's **43**.

10.

Read the picture



socks

pairs of socks



socks

pairs of socks