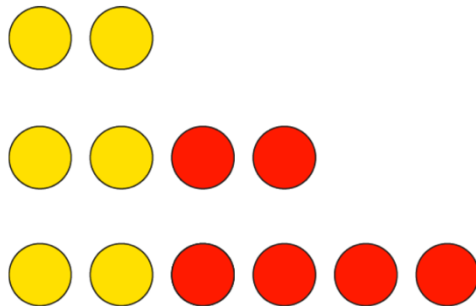



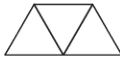




Maths worksheet 1

WB 18.5.20

1. What is the same and what is different? What is happening to the red counters? What is happening to the number of counters in each group?



2. Fill in the missing parts of the table.

Part	Number of equal parts	Whole
		
		
		

3. Mrs Hastings has a huge bunch of flowers. She divides the flowers into four equal vases. Here is one part (vase) of the flowers, what is the whole? How many flowers has she got altogether?

