


Maths – Week 4 WB 11.5.20

1. Mrs Warrington and Mrs Potts each had a piece of paper. They both folded their paper into four equal parts. Do you agree or disagree? Explain your answer.

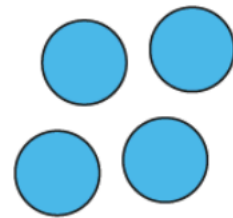
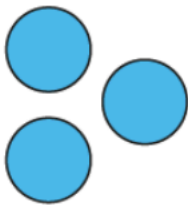
Mrs Potts



Mrs Warrington

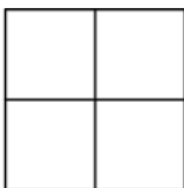


2. Can these counters be rearranged to show 3 equal groups?



3. Have a look at each square and record if the square has equal or unequal parts. When you have done that, what do you notice about the parts?

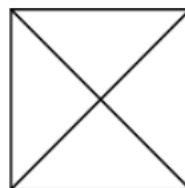
A



B



C



D

