



Maths worksheet 2-WB 4.5.20

1. Complete the multiplication.



$5 \times 9 = \square$ $9 \times 5 = \square$


$\square \times 9 = \square$ $9 \times \square = \square$

What is the product of 5 and 9? Write the multiplication to show this.

$$\square \times \square = \square$$

2. There are nine batteries in a packet. How many batteries are there in 8 packets?  
Show your multiplication.



Challenge: - There were eight flowers in a flowerbed, each with 9 petals. If one of the flowers I picked, how many petals will be left in the flowerbed?