

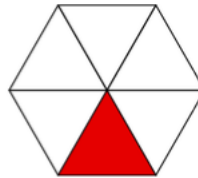
Maths Worksheet 1

WB 1.6.20

Complete the stem sentence then complete the fraction.

1. The whole has been divided into _____ equal parts.

_____ of the parts has been shaded.

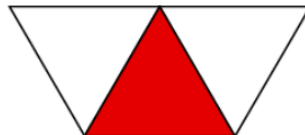


$$\frac{\square}{6}$$

2. Complete the stem sentence then complete the fraction.

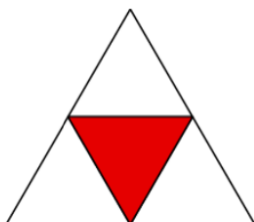
The whole has been divided into _____ equal parts.

_____ of the parts has been shaded.



$$\frac{\square}{3}$$

3. Now have a go at this one.



$$\frac{\square}{\square}$$