

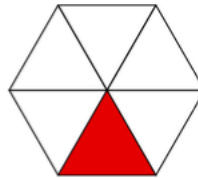
Maths Worksheet 1

WB 1.6.20

Complete the stem sentence then complete the fraction.

1. The whole has been divided into **6** equal parts.

1 of the parts has been shaded.

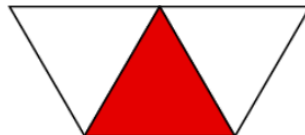


$$\frac{1}{6}$$

2. Complete the stem sentence then complete the fraction.

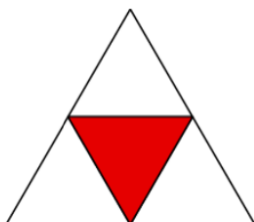
The whole has been divided into **3** equal parts.

1 of the parts has been shaded.



$$\frac{1}{3}$$

3. Now have a go at this one.



$$\frac{1}{4}$$